

Name: _____


Date: _____

Test on Chapters 1 and 2

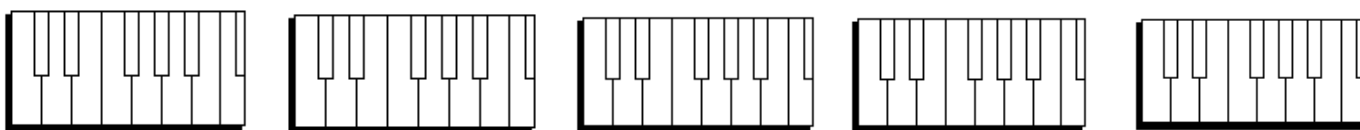

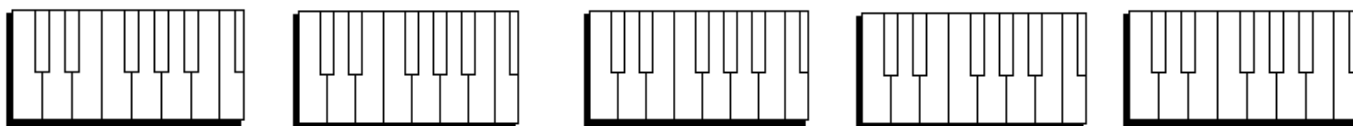

<http://www.gmajormusictheory.org/Fundamentals/workbooks.html>

1. Write the letter names for these notes.





2. Draw dots on the keyboard for the notes on the staff.



3. Write enharmonic equivalents for these notes. (instructor writes letter names in boxes)

_____ _____ _____ _____ _____