

Chapter 3 Basic Rhythms






- In this chapter you will:
1. Review some rhythmic notation
 2. Draw bar lines to make measures
 3. Write time signatures
 4. Clap rhythms with sixteenth notes
 5. Count the beats in phrases with dotted notes
 6. Count the beats in phrases with rests

date:

3.1 Review some rhythmic notation

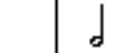

1. A beat is _____
(see worksheet 1.7)

2. *DRAW* lines to match items in column 1 with items in column 2, AND *DRAW* lines to match items in column 2 with items in column 3.

1. Note symbol	2. Note Name	3. Usual number of beats
	2 eighth notes	1
	a quarter note	2
	a whole note	4
	an eighth note	1
	a half note	one half




3. *DRAW* the note in the box which makes one side of the “equation” equal the other side.

a.  = 

d.  = 

b.  = 

e.   = 

c.   = 

Pathways to Harmony, Chapter 3. Basic Rhythms

Date: _____

3.2 Draw bar lines to make measures

- Vertical lines on the staff are called bar lines.
- The spaces between the bar lines are called measures.
- The first measure in a staff does not usually have a left bar line.
- Each measure has the same number of beats.
- Measures show the regular pattern of strong and weak beats in music.
The first beat of every measure is strong.
- The double bar at the end of the above staff signals the end of the music

1. *HOW MANY* measures are there in the phrase above? _____
2. *DRAW* bar lines in the following phrases. Each measure should have the number of quarter note beats which are shown in the box on the left. End the phrases with a double bar.

EXAMPLE 2 ♩ ♩ | ♩ ♩ | ♩ | ♩ ||

4 ♩ ♩ ♩ ♩ ♩ ♩ ♩ ♩ ♩ ♩ ♩ ♩ ♩ ♩ ♩ ♩

3 ♩ ♩ ♩ ♩ ♩ ♩ ♩ ♩ ♩ ♩ ♩ ♩ ♩ ♩ ♩ ♩ ♩ ♩ ♩ ♩ ♩ ♩

5 ♩ ♩ ♩ ♩ ♩ ♩ ♩ ♩ ♩ ♩ ♩ ♩ ♩ ♩ ♩ ♩

3 ♩ ♩ ♩ ♩ ♩ ♩ ♩ ♩ ♩ ♩ ♩ ♩ ♩ ♩ ♩ ♩

Clap these rhythms.

Date:

3.3 Write time signatures

Time signature

Who can re-tell the things that be-fell us? Who can count them?

- The numbers at the beginning of a piece, the two fours after the clef in the above phrase, are called a time signature. The time signature tells how long each measure is.
- The top number tells how many counts there are in each measure. The bottom number tells what kind of note to count. If there is a 4 on the bottom, count the time in terms of quarter notes.

1. *HOW MANY* quarter notes long is a measure of $\frac{6}{4}$ (that is, a measure preceded by a time signature of $\frac{6}{4}$)?

2. *HOW MANY* quarter notes long is a measure of $\frac{6}{4}$?

3. WRITE the time signatures in the boxes. Count the length of each measure in terms of quarter notes.

EXAMPLE $\frac{6}{4}$
1 2 3 4 5 6 | 1 2 3 4 5 6 ||

1.

2.

3.

4. DRAW bar lines according to the time signatures. End with a double bar.

EXAMPLE $\frac{4}{4}$











1. $\frac{3}{4}$

2. $\frac{2}{4}$

3. $\frac{4}{4}$

Date:

3.6 Count the beats in phrases with rests

	whole note	} 4 beats
	whole rest	
	half note	} 2 beats
	half rest	
	quarter note	} 1 beat
	quarter rest	
	eighth note	} 1/2 beat (2 per beat)
	eighth rest	
	sixteenth note	} 1/4 beat (4 per beat)
	sixteenth rest	

- Rests tell how long silences are in music.
- Each note has a rest which stands for the same length of time as the note. See the chart above.

DRAW rests in the boxes so that both sides of the “equations” add to the same length of time.

1.   =  
2.  =    
3.    =
4.  =   
5. =         